

If a number sequence has a pattern, it means that there is a number rule involved.

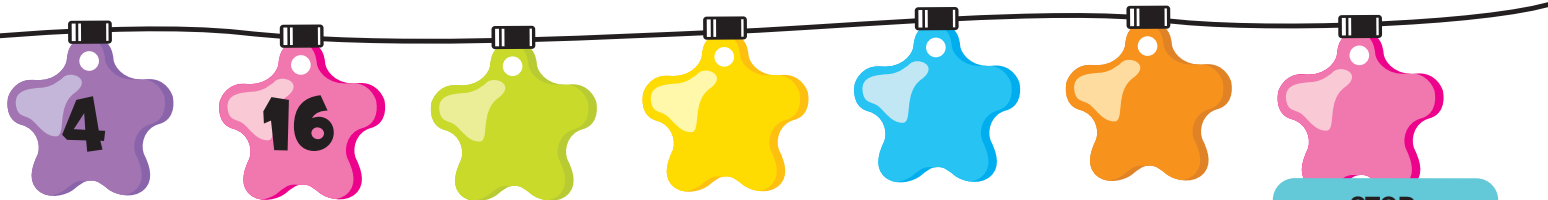
# NUMBER PATTERNS

**LOOK AT THESE BEADS ...**  
Each number has been doubled - that is the pattern.



**FOLLOW THE RULES AND FILL IN THE NUMBERS:**


Make a number pattern by multiplying by the same number each time.




Make a number pattern by adding the same number each time.



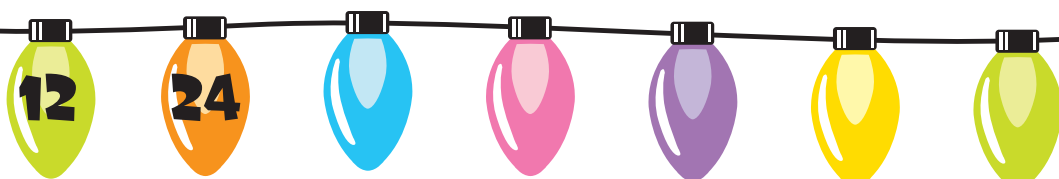
Make a number pattern by dividing by the same number each time.



Make a number pattern by subtracting the same amount each time.



Make a number pattern by doubling the number each time.



**STOP, SCAN & STUDY!**

Scan the QR code & get Maths study assistance!

