


# MATHS MANIA

Do the sums for each mouse to see which mound of sand they belong to: A, B or C. Tick the right one.


**A**  
855

**B**  
397


**C**  
564




$47 \times 12$   A  B  C




$171 \times 5$   A  B  C



$94 \times 6$   A  B  C




$794 \div 2$   A  B  C




$95 \times 9$   A  B  C



$1191 \div 3$   A  B  C



$3420 \div 4$   A  B  C



$8460 \div 15$   A  B  C

STOP,  
SCAN & STUDY!



Scan the  
QR code & get  
Maths study  
assistance!

