

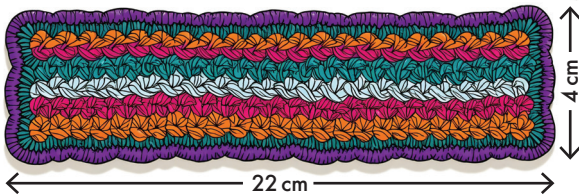
# AROUND AND ABOUT

## PERIMETER:


A perimeter is the distance around the outside of a two-dimensional shape.

You calculate the perimeter by adding all four sides together.

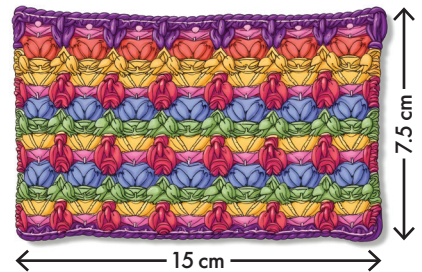
CALCULATE THE PERIMETER OF THE SQUARES AND BLANKETS BEING KNITTED FOR A FUNDRAISER.



**A**  cm



**B**  cm



**C**  cm

This artist has an easel that is 95 cm tall and is 48 cm wide.

WHAT IS THE PERIMETER OF THE EASEL?

The spare easel is 63 cm tall and 68 cm wide.

WHAT IS THE PERIMETER OF THE EASEL?

